

# MONITORING LEARNER'S PROGRESS

## GRADE 6 TERM 1 YEAR 2022

### SOCIAL STUDIES & C.R.E. ACTIVITIES

Name: .....County Name.....

Learner's Number:

Gender:      Boy               Girl

County Name..... County code

Sub - county Name..... Sub-county code

School Name..... School code

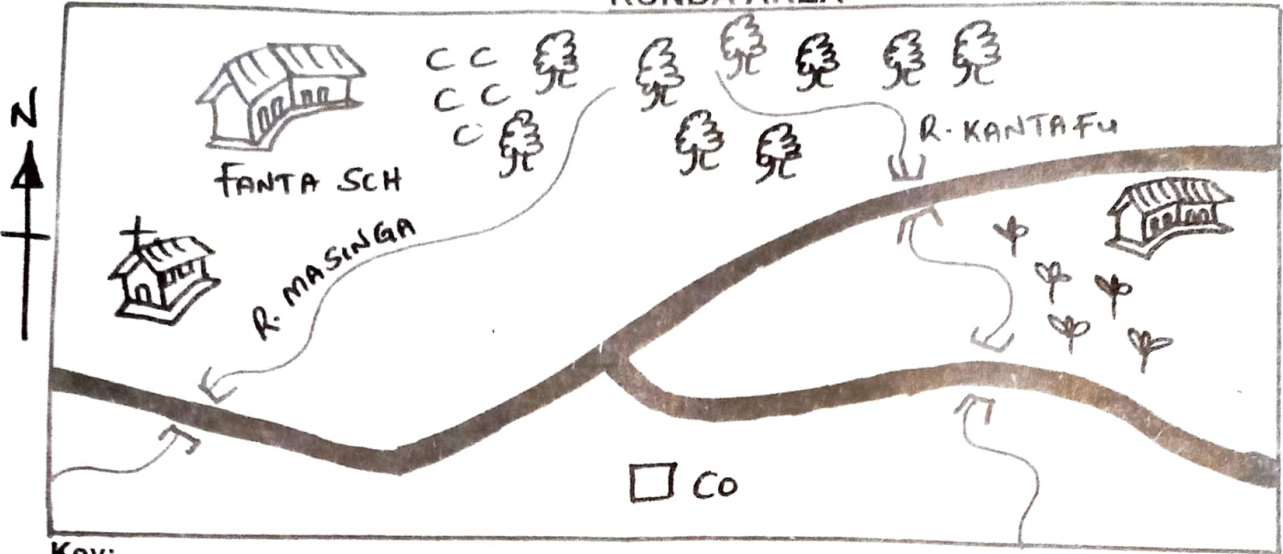
#### ASSESSMENT RUBRICS



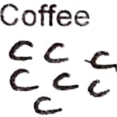




| Exceeds<br>Expectation<br>4 | Meets<br>Expectation<br>3 | Approaching<br>Expectation<br>2 | Below<br>Expectation<br>1 |
|-----------------------------|---------------------------|---------------------------------|---------------------------|
|                             |                           |                                 |                           |

|                                   |  |
|-----------------------------------|--|
| <b>TOTAL<br/>MARKS<br/>SCORED</b> |  |
|-----------------------------------|--|

Study the map of Runda area shown below and then answer questions 1 to 10.

RUNDA AREA



- Key:**
- Forest  

  - School  

  - Coffee  

  - Beans  

  - Tarmac road  

  - Church  

  - Chief's office  


1. The forest is to the \_\_\_\_\_ of Fanta school
  2. The head of Runda area is the \_\_\_\_\_
  3. What is the direction of the Church from Runda school? \_\_\_\_\_
  4. The religion of the people of Runda area is \_\_\_\_\_
  5. How many rivers are there in Runda area?  
\_\_\_\_\_
  6. Name one of the rivers in Runda area?  
\_\_\_\_\_
  7. Which food crop is grown in the area?  
\_\_\_\_\_
  8. What type of cash crop is grown in the area?  
\_\_\_\_\_
  9. What is the work of the boarder lines on the map? \_\_\_\_\_
  10. What means of transport is used in Runda area? \_\_\_\_\_
- Name the elements of weather.
11. \_\_\_\_\_
  12. \_\_\_\_\_
  13. \_\_\_\_\_
  14. \_\_\_\_\_

15. The officers who represent Kenya in other countries are known as \_\_\_\_\_

16. Draw a valley.

17. Name one historic built environment.  
\_\_\_\_\_

18. The country that neighbours Kenya to North is \_\_\_\_\_

19. Who is at the lowest position in the school administration? \_\_\_\_\_


20. Name one method of interaction used in African traditional education. \_\_\_\_\_

21. Diatomite is mined at a place called \_\_\_\_\_ near Gilgal.

22. Name one method of inland fishing in Kenya. \_\_\_\_\_

23. What does KWS stand for? \_\_\_\_\_

24. What is the meaning of the road sign.



25. The spiritual leader of the Maasai was called \_\_\_\_\_

26. How can one become a Kenya citizen?  
\_\_\_\_\_

27. Name one of the symbols of national unity in Kenya. \_\_\_\_\_

28. The rights of children in Kenya are written in a document called \_\_\_\_\_

29. What title is given to the head of judiciary in Kenya? \_\_\_\_\_

30. Mekatilili wa Menza came from which community in Kenya? \_\_\_\_\_

C.R.E.

1. God provided \_\_\_\_\_ instead of sacrificing Isaac.
2. Moses excused himself by saying that he was a \_\_\_\_\_
3. Solomon Prayed to God for \_\_\_\_\_
4. Name one of the daughters of Job.  
\_\_\_\_\_
5. Samson killed a lion using \_\_\_\_\_
6. People who brought Christianity in Kenya are called \_\_\_\_\_
7. Daniel interpreted the dream of a Babylonian king called \_\_\_\_\_
8. Identify the occasion when king Belshazaar demonstrated pride. \_\_\_\_\_
9. The prophets of baal and Elijah had a contest at mount \_\_\_\_\_
10. John the baptists taught about the value of \_\_\_\_\_
11. The parable of the lost sheep refers to \_\_\_\_\_
12. The rich young man was not ready to \_\_\_\_\_ his wealth.
13. What activity brought unity to the believers in the early Church? \_\_\_\_\_
14. Why do Christians take part in the Lord's Supper? \_\_\_\_\_
15. Sarah likes helping the needy in her community. What fruit of the Holy Spirit does she have? \_\_\_\_\_
16. How can you overcome unhealthy boy - girl relationship? \_\_\_\_\_
17. What is the cause of a violation of the right to life? \_\_\_\_\_
18. Who saw the nakedness of his father?  
\_\_\_\_\_
19. Peter and John show their courage before the high priest by \_\_\_\_\_
20. Why did Adam and Eve disobey God?  
\_\_\_\_\_

50 x 2 = 100